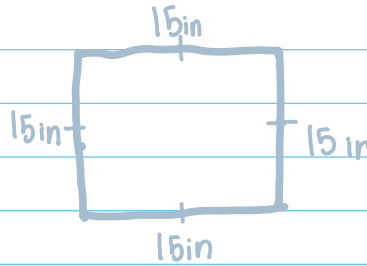


10.7 Perimeter

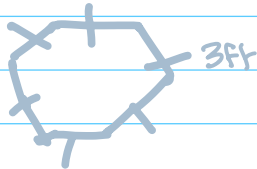
Distance around a polygon.

Add all the sides
"fence" "border"



$$P = 15 + 15 + 15 + 15$$

$$P = 60 \text{ inches}$$



$$P = 3 + 3 + 3 + 3 + 3 + 3$$

$$P = 18 \text{ ft}$$

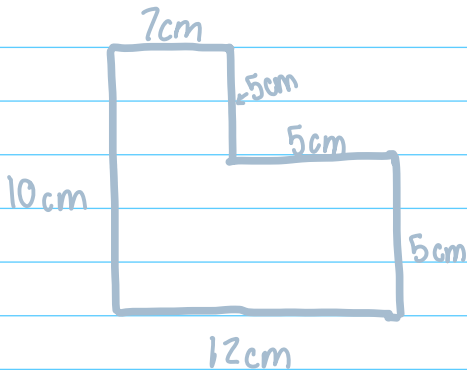


$$\begin{array}{r} 26 \\ + 26 \\ \hline 52 \\ + 24 \\ \hline 76 \end{array}$$

$$P = \text{add all sides}$$

$$P = 26 + 26 + 12 + 12$$

$$P = 76 \text{ yd}$$



$$P = \text{add all sides}$$

$$P = 5 + 12 + 10 + 7 + 5 + 5$$

$$P = 44 \text{ cm}$$

$$P = \text{add all sides}$$

$$P = 10 + 10 + 13 + 13 + 21$$

$$P = 67 \text{ ft}$$

